

## Rajya Shiksha Kendra M.P., Bhopal

Annual Examination Session - 2025-26

Subject - Maths

Time -  $2\frac{1}{2}$  hours.

Class - 5

M.M. - 60

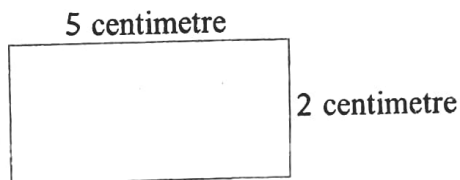
## Multiple Choice Questions (Question 1 to 5)

Instructions- Choose and write the correct answer. Each question carries 1 mark.

Q.1 A closed figure consisting of three sides is called-

- (A) Square (B) Rectangle  
(C) Circle (D) Triangle

Q.2 The area of given figure is -



- (A) 10 cm (B) 10 Sq cm  
(C) 8 Sq cm (D) 8 cm

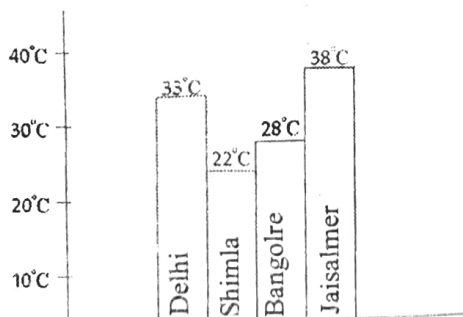
Q.3 How many corners are there in a cube?

- (A) 10 (B) 12  
(C) 4 (D) 5

Q.4 A person has Rs 400. He bought laddus for  $\frac{1}{4}$  of the total amount. Then find, how much money did he buy laddus for?

- (A) Rs 100 (B) Rs 200  
(C) Rs 250 (D) Rs 300

Q.5 Which city has the maximum temperature in the given bar chart?



- (A) Delhi (B) Bangalore  
(C) Shimla (D) Jaisalmer

E2026MTH05545

E2026MTH05545

Fill in the blanks (Question 6 to 10)

Instruction- Each question carries 1 mark.

- Q.6 The Perimeter of square of side 7 cm will be ~~7\*4~~ 28 cm.
- Q.7 The mirror image of digit 6 will be ~~6~~ 9.
- Q.8 In making a map ~~Exact~~ information is necessary to know the exact location of important buildings and roads.
- Q.9 ~~|||||~~ will be the tally mark for digit 10.
- Q.10 There are ~~2 Kg~~ kilograms in 2000 grams.



Very Short Answer Type Questions (Question 11 to 16)

Instructions- Answer the following questions in one word/sentence. Each question carries 2 marks.

- Q.11 Find the Perimeter of a square card whose length is 5 centimetres.
- Q.12 Which figure will be formed when the given figure is rotated half way?



- Q.13 Give the name of any two objects having cuboidal shape.
- Q.14 Convert 1 m 75 centimetres to centimetres.
- Q.15 If the length of a rectangle is 15 centimetres and breadth is 12 centimetres. Then find the area of rectangle.  $1 \times 12$
- Q.16 A glass marble weighs 12 grams. If there are 10 glass marbles of the same weight then what will be their weight?

Short Answer Type Questions (Question 17 to 22)

Instructions : Answer the following questions. Each question carries 3 marks.

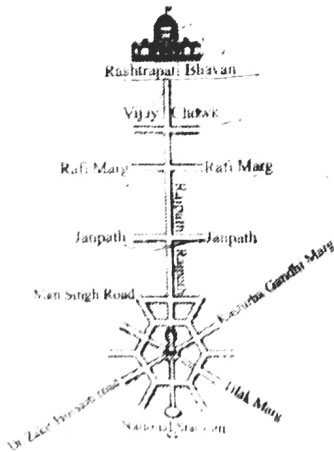
- Q.17 On the basis of given figure, answer the following questions-



- (A) Figure is closed or open?
- (B) How many sides are there in the given figure?
- (C) How many angles are there in the figure?

- Q.18 Find three successive digits of this pattern?  
101, 121, 141, .....

- Q.19 Look at the map and answer the following questions.



E2026MTH05545

E2026MTH05545

E2026MTH05545

